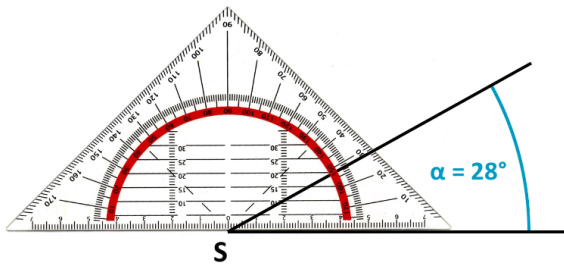


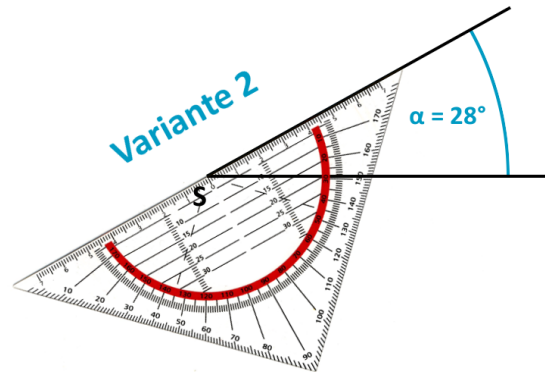
Name: Datum:

Winkel zeichnen - AB 2

Im Unterricht hast Du zwei Varianten kennengelernt, einen Winkel mit dem Geodreieck zu zeichnen.



Variante 1




Variante 2


1

Zeichne die Winkel.


$\alpha = 43^\circ$




$\beta = 111^\circ$



$\gamma = 87^\circ$



$\delta = 100^\circ$



2

Zeichne die Winkel in dein Heft und gib die jeweilige Winkelart an.

- a) $\alpha = 180^\circ$ b) $\beta = 216^\circ$ c) $\gamma = 12^\circ$ d) $\delta = 360^\circ$ e) $\epsilon = 189^\circ$ f) $\zeta = 60^\circ$