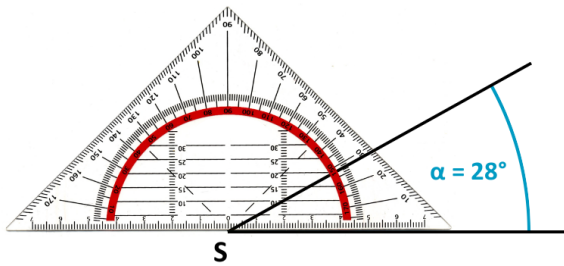


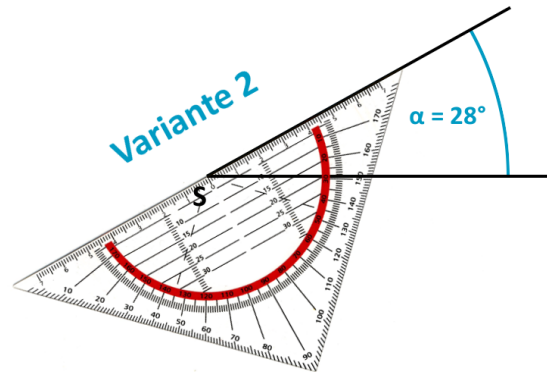
Name:  Datum:

**Winkel zeichnen - AB 1**

Im Unterricht hast Du zwei Varianten kennengelernt, einen Winkel mit dem Geodreieck zu zeichnen.



**Variante 1**




**Variante 2**


**1**

Zeichne die Winkel.


$\alpha = 34^\circ$




$\beta = 52^\circ$



$\gamma = 71^\circ$



$\delta = 106^\circ$



**2**

Zeichne die Winkel in dein Heft und gib die jeweilige Winkelart an.

a)  $\alpha = 90^\circ$

b)  $\beta = 275^\circ$

c)  $\gamma = 49^\circ$

d)  $\delta = 163^\circ$

e)  $\epsilon = 87^\circ$

f)  $\zeta = 348^\circ$