




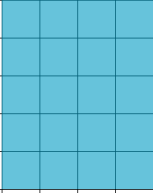



**1**

Berechne den Flächeninhalt der Figuren.

Hinweis: Du benötigst kein Lineal. Eine Kästchenlänge beträgt 0,5 cm.

<p>a)</p> <p><i>Beispiel:</i></p> <p><math>A = 4\text{ cm} \cdot 1,5\text{ cm}</math></p> <p><math>A = \underline{6\text{ cm}^2}</math></p> 	<p>b)</p> 
<p>c)</p> 	<p>d)</p> 
<p>e)</p> 	<p>f)</p> 
<p>g)</p> 	<p>h)</p> 