


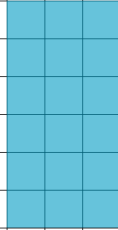
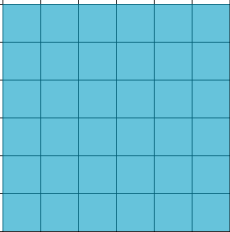

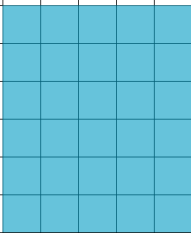


1

Berechne den Flächeninhalt der Figuren.

Hinweis: Du benötigst kein Lineal. Eine Kästchenlänge beträgt 0,5 cm.

<p>a)</p>  <p>Beispiel: $A = 2\text{ cm} \cdot 3\text{ cm}$ $A = \underline{6\text{ cm}^2}$</p>	<p>b)</p> 
<p>c)</p> 	<p>d)</p> 
<p>e)</p> 	<p>f)</p> 
<p>g)</p> 	<p>h)</p> 